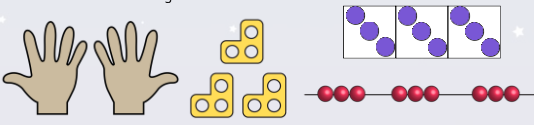


To be able to use pictures to support multiplication

MathShed

Starter:
Which one doesn't belong?




Explain your answer.

To be able to use pictures to support multiplication

MathShed

Activity 1:
Complete the sentences below.




_ equal groups of _ = _
 _ multiplied by _ = _
 _ x _ = _


To be able to use pictures to support multiplication

MathShed

Activity 2:
Use the comparison symbols <, > and = to complete the following statements.




4 equal groups of 2



To be able to use pictures to support multiplication

MathShed

Activity 3:
Complete the table below.

image	multiplication	worded sentence
		3 equal groups of 4 are equal to 12
	$25 = 5 \times 5$	
		6 equal groups of 10 are equal to 60

To be able to use pictures to support multiplication

MathShed

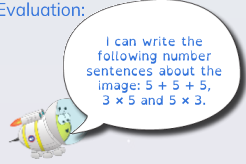
Activity 4:
Use sketches to help you solve the following.

- There are four plates. Each plate has five doughnuts. How many doughnuts are there altogether?
- There are seven boxes. Each box holds 10 pineapples. How many pineapples are there in total?


To be able to use pictures to support multiplication

MathShed

Evaluation:



I can write the following number sentences about the image: $5 + 5 + 5$, 3×5 and 5×3 .



Do you agree?
Explain your answer.